

Count the amount of each of the different objects.

1)



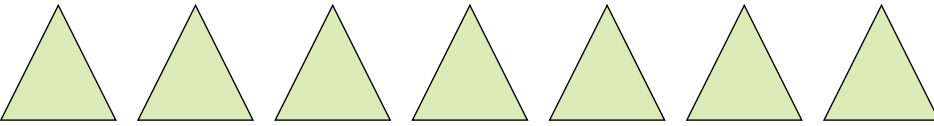
2)




3)



4)



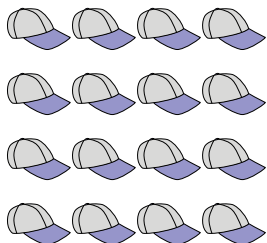
5)




6)




7)



8)



9)



Answers

1. _____

2. _____

3. _____

4. _____

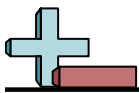
5. _____

6. _____

7. _____

8. _____

9. _____



Count the amount of each of the different objects.

1)



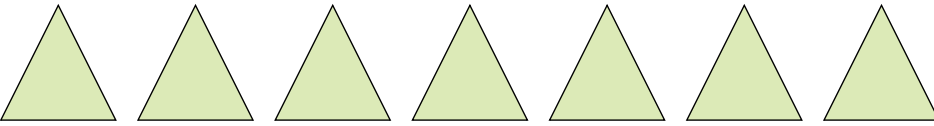
2)




3)



4)



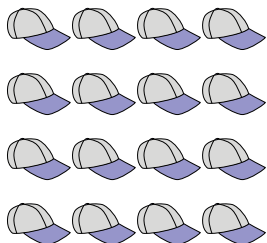
5)




6)




7)



8)



9)



Answers

1. 3

2. 17

3. 7

4. 7

5. 5

6. 16

7. 16

8. 6

9. 9